


Homework Package

Week Eight
Grade One

Name _____ Date _____




Morning Work - Monday

Name _____

Date _____

For each question, indicate the correct answer. If you are able to print this paper you can circle the answer. If you are unable to print this paper you can write your answers on a separate paper.

1. Syllable



alligator

1

2

3


4

5

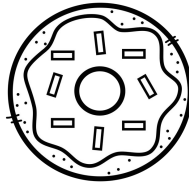
2. Rhyming



putt



1



2




3




4


3. Beginning sound



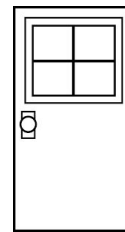
dice



1



2



3



4

4. End sound



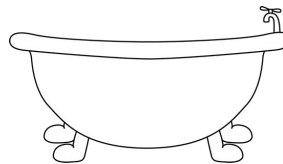
tooth



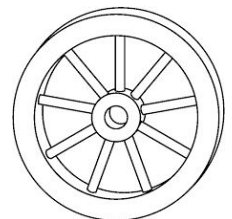
1



2



3



4

5. Number of sound



good
(g/oo/d)

3

4

5

6

7


Morning Work - Tuesday

Name _____

Date _____

For each question, indicate the correct answer. If you are able to print this paper you can circle the answer. If you are unable to print this paper you can write your answers on a separate paper.

1. Syllable



elephant

1

2

3

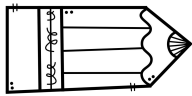
4

5

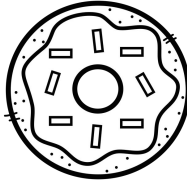
2. Rhyming



stencil



1



2




3




4


3. Beginning sound




octopus



1



2




3



4

4. End sound



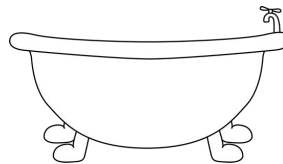
bike



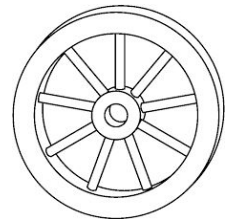
1



2



3



4

5. Number of sound



beach
(b/ea/ch)

3

4

5

6

7


Morning Work - Wednesday

Name _____

Date _____

For each question, indicate the correct answer. If you are able to print this paper you can circle the answer. If you are unable to print this paper you can write your answers on a separate paper.

1. Syllable



card

1


2

3


4

5


2. Rhyming




moon




1



2



3



4


3. Beginning sound



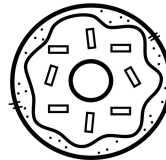
Vacuum



1



2



3




4

4. End sound



arrow



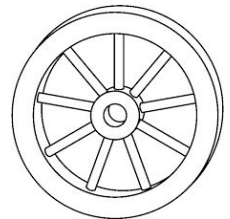
1



2



3



4

5. Number of sound



globe
(g/l/oa/b)

3

4

5

6

7

Morning Work - Thursday

Name _____

Date _____

For each question, indicate the correct answer. If you are able to print this paper you can circle the answer. If you are unable to print this paper you can write your answers on a separate paper.

1. Syllable



cupcake

1


2

3

4

5

2. Rhyming




flower



1



2




3




4

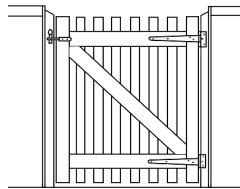
3. Beginning sound



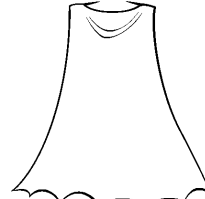
grape




1



2




3




4

4. End sound



kiwi



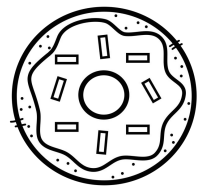
1



2



3



4

5. Number of sound



dishes
(d/i/sh/e/z)

3

4

5

6

7


Morning Work - Friday

Name _____

Date _____

For each question, indicate the correct answer. If you are able to print this paper you can circle the answer. If you are unable to print this paper you can write your answers on a separate paper.

1. Syllable



hippopotamus

1

2

3


4

5


2. Rhyming




goodbye



1



2




3




4

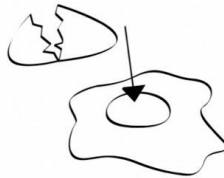
3. Beginning sound



yard




1



2



3



4

4. End sound




wrench



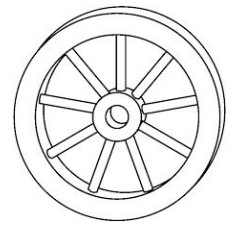
1



2



3



4

5. Number of sound



recess
(r/e/s/e/s)

3

4

5


6

7

1:45 ~ $l \times w \times h$ ~  ~ 1 ft 6 in ~ 360°

Name: _____

Number of the day



Find and color the number on the 100 chart.

1	2	3	4	5	6	7	8	9	10
11	12	13	14	15	16	17	18	19	20
21	22	23	24	25	26	27	28	29	30
31	32	33	34	35	36	37	38	39	40
41	42	43	44	45	46	47	48	49	50
51	52	53	54	55	56	57	58	59	60
61	62	63	64	65	66	67	68	69	70
71	72	73	74	75	76	77	78	79	80
81	82	83	84	85	86	87	89	89	90
91	92	93	94	95	96	97	98	99	100

Solve it.

1 more

1 less

10 more

10 less

Color to show the number.

10	10	10	10	10	10	10	10	10	10
10	10	10	10	10	10	10	10	10	10
10	10	10	10	10	10	10	10	10	10
10	10	10	10	10	10	10	10	10	10
10	10	10	10	10	10	10	10	10	10

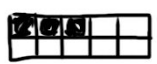
10	10	10
10	10	10
10	10	10

Write the number in words.

$\frac{1}{2} = \frac{2}{4}$
 $4 \times 5 = 20$
 $3 \sqrt{15}$
 5.26
 360°

1.65
 $2 \frac{1}{3} > 2 \frac{1}{5}$
 $A^2 + B^2 = C^2$
 $4 \div 2 = 2$
 $3 + 2 = 5$

1:30 PM







Adding Doubles Plus 1



Name: _____



Date: _____

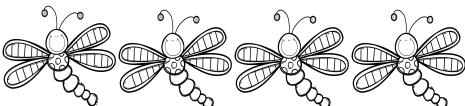

Add the doubles by counting the dots on the butterfly's wings.

	$\underline{\quad} + \underline{\quad} =$
	$\underline{\quad} + \underline{\quad} + 1 =$

	$\underline{\quad} + \underline{\quad} =$
	$\underline{\quad} + \underline{\quad} + 1 =$

	$\underline{\quad} + \underline{\quad} =$
	$\underline{\quad} + \underline{\quad} + 1 =$

	$\underline{\quad} + \underline{\quad} =$
	$\underline{\quad} + \underline{\quad} + 1 =$


	$\underline{\quad} + \underline{\quad} =$
	$\underline{\quad} + \underline{\quad} + 1 =$

Adding Doubles Plus 1


Name: _____

Date: _____


Add the doubles by counting the dots on the butterfly's wings.




$$\underline{\quad} + \underline{\quad} =$$
$$\underline{\quad} + \underline{\quad} + 1 =$$




$$\underline{\quad} + \underline{\quad} =$$
$$\underline{\quad} + \underline{\quad} + 1 =$$




$$\underline{\quad} + \underline{\quad} =$$
$$\underline{\quad} + \underline{\quad} + 1 =$$




$$\underline{\quad} + \underline{\quad} =$$
$$\underline{\quad} + \underline{\quad} + 1 =$$



$$\underline{\quad} + \underline{\quad} =$$
$$\underline{\quad} + \underline{\quad} + 1 =$$



oi

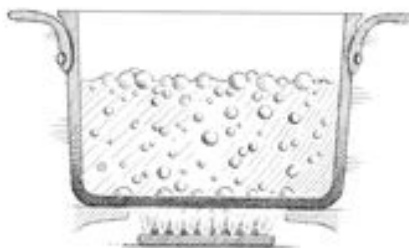


ACTION

Cup your hands around your mouth as if hailing a passing boat, saying *Oi! Ship ahoy!*

oi oi oi oi oi oi . . .
 sh . th . qu . ou .

Three of these pictures have an /oi/ sound in them.
 Cross out the one that does not.



soil

joint

point

void

Story Map



Name: _____

Date: _____

Listen to one of the shadow story read alouds. Draw pictures and complete the sentences to explain what happened in the story.

Title: _____ Author: _____

First	Then	Last
-------	------	------

First, _____

Then, _____


Lastly, _____

The main character is _____

The setting is _____

used capital letters. used finger spaces. used punctuation.

Journal




My favourite wild animal is a _____

because _____

Shadow Detective

Name: _____ Date: _____

Today you are going to be a shadow detective! Head outside with your family and find an interesting shadow. Draw an illustration of your shadow and answer the questions below.



The shadow I found is of _____

_____. It was _____ am/pm

when I found the shadow. I traced my shadow and

measured the length. It was _____ cm long.

Use the chart below to compare how the shadow changes throughout the day.

Pick several times throughout the day to view the shadow. Record the time, measurement, and draw a sketch.

Time	Measurement	Sketch
	_____ cm	
	_____ cm	
	_____ cm	
	_____ cm	
	_____ cm	