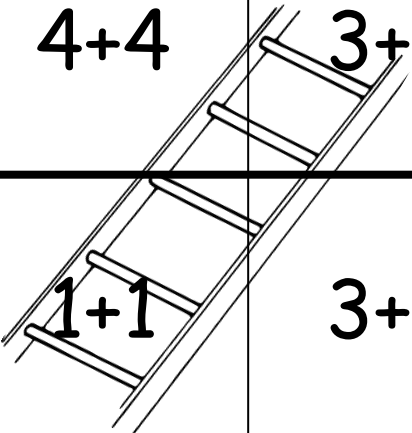
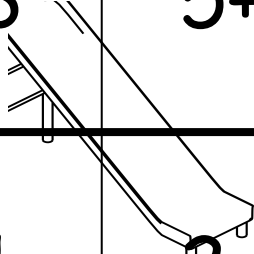

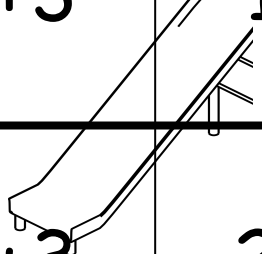
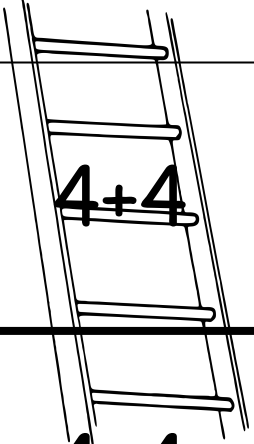
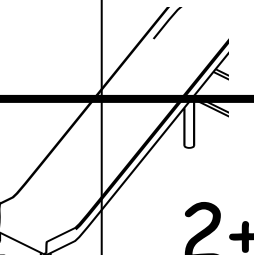


Slides and ladders

Adding doubles to 10

Directions: Roll a dice and move that many spaces. Solve the problem that is in the space that you landed on. If you land on a space that has the bottom of a ladder in it, you move up the ladder. If you land on a space that has the top of a slide, you slide down.

End!	4+4	3+3	2+2	1+1
4+4		3+3	5+5	2+2
5+5	3+3	1+1		3+3
		2+2	5+5	
5+5	3+3	1+1		4+4
Start	1+1	3+3	2+2	5+5

Slides and ladders

Adding doubles to 20

Directions: Roll a dice and move that many spaces. Solve the problem that is in the space that you landed on. If you land on a space that has the bottom of a ladder in it, you move up the ladder. If you land on a space that has the top of a slide, you slide down.

End!	10+10	3+3	6+6	9+9
4+4	8+8	7+7	5+5	2+2
6+6	9+9	8+8	2+2	7+7
1+1	10+10	6+6	5+5	4+4
5+5	8+8	1+1	2+2	9+9
Start	6+6	3+3	7+7	5+5